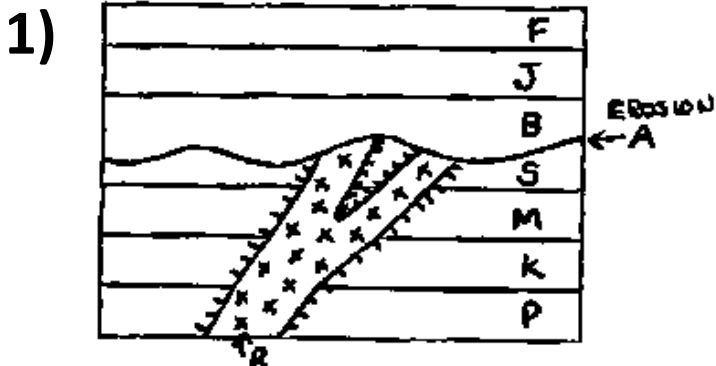



Relative Dating of Rock Strata

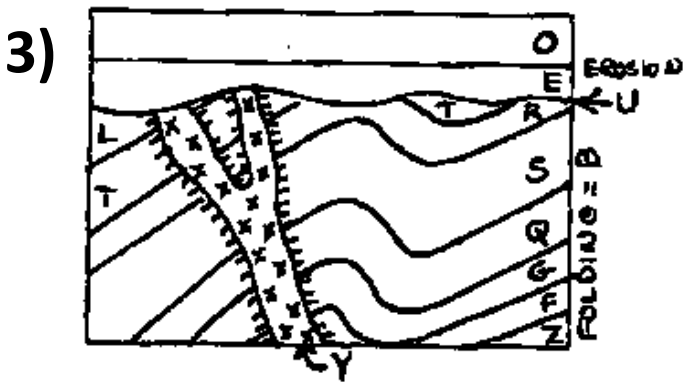
Directions: For each rock layer diagram, arrange the lettered steps in the correct chronological sequence.



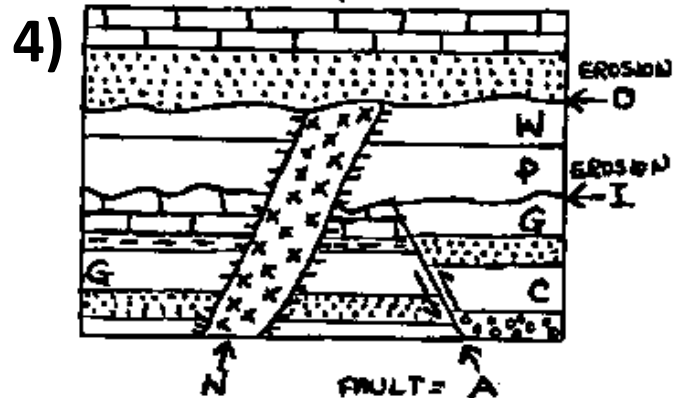
1) _____	6) _____
2) _____	7) _____
3) _____	8) _____
4) _____	9) _____
5) _____	



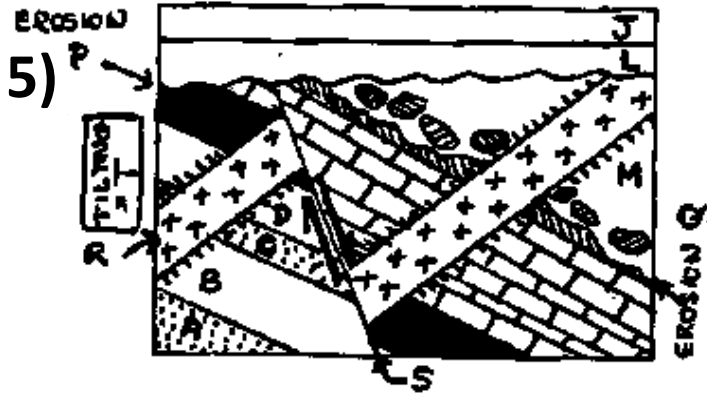
1) _____	7) _____
2) _____	8) _____
3) _____	9) _____
4) _____	10) _____
5) _____	11) _____
6) _____	



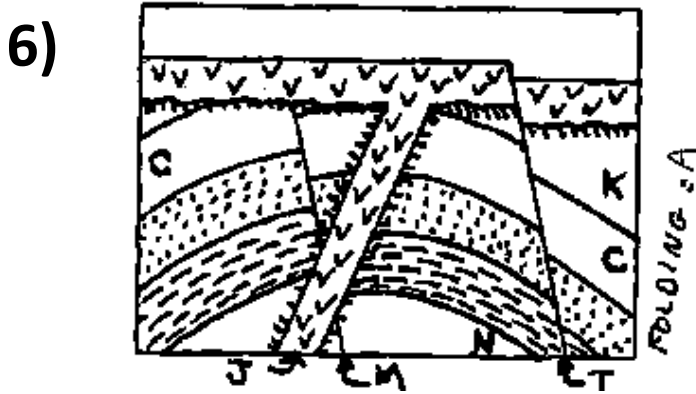
1) _____	8) _____
2) _____	9) _____
3) _____	10) _____
4) _____	11) _____
5) _____	12) _____
6) _____	13) _____
7) _____	



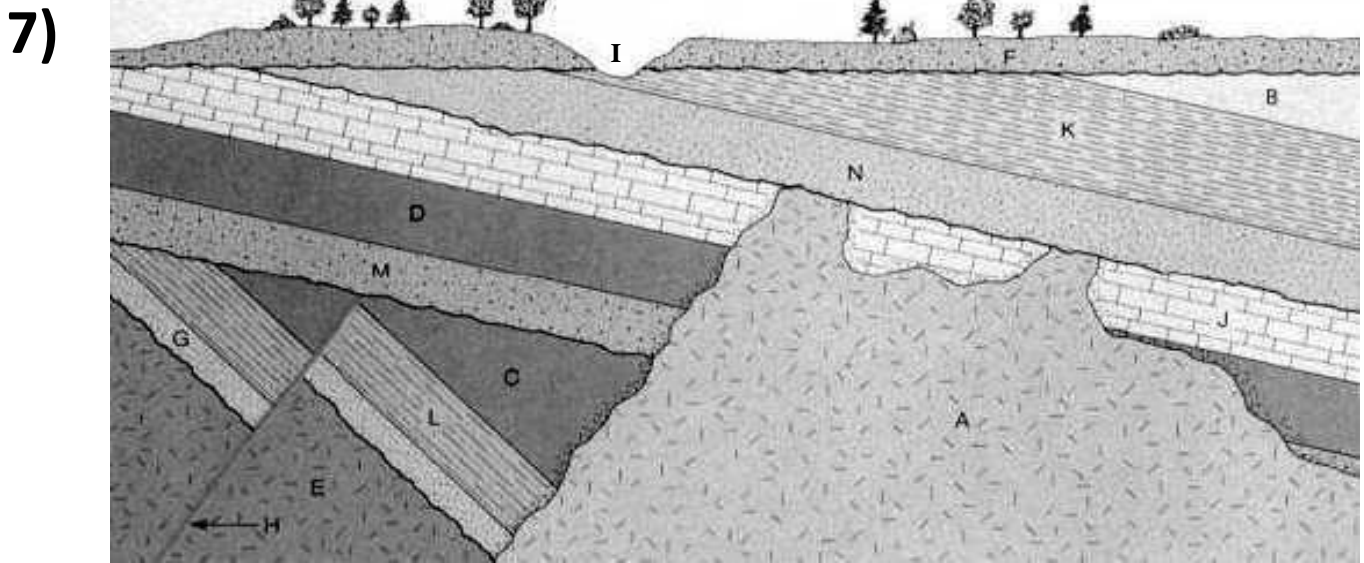
1) _____	5) _____
2) _____	6) _____
3) _____	7) _____
4) _____	8) _____



- | | |
|----------|-----------|
| 1) _____ | 7) _____ |
| 2) _____ | 8) _____ |
| 3) _____ | 9) _____ |
| 4) _____ | 10) _____ |
| 5) _____ | 11) _____ |
| 6) _____ | 12) _____ |



- | | |
|----------|----------|
| 1) _____ | 5) _____ |
| 2) _____ | 6) _____ |
| 3) _____ | 7) _____ |
| 4) _____ | |



Determine the order of the rock strata and geologic events by writing the corresponding chronological number next to each letter.

- | | | |
|----------|----------|----------|
| A) _____ | F) _____ | K) _____ |
| B) _____ | G) _____ | L) _____ |
| C) _____ | H) _____ | M) _____ |
| D) _____ | I) _____ | N) _____ |
| E) _____ | J) _____ | |